



Count the amount of each of the different objects.

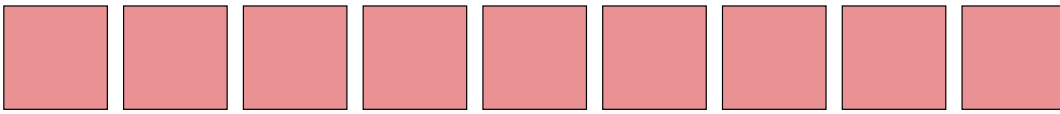
1)



2)




3)



4)




5)



6)



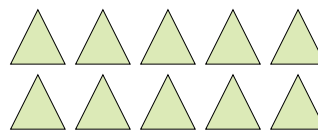
7)



8)



9)



Answers

1. _____

2. _____

3. _____

4. _____

5. _____

6. _____

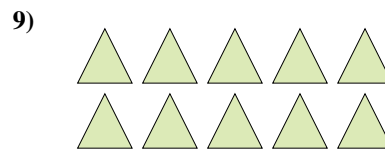


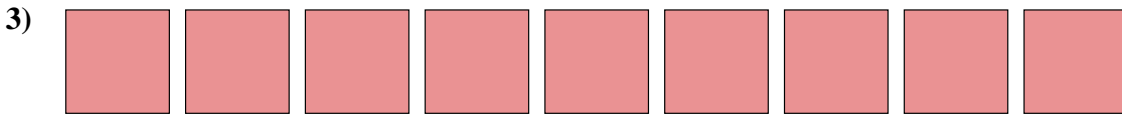


7. _____

8. _____

9. _____



Count the amount of each of the different objects.



Answers

1. 7

2. 7

3. 9

4. 16

5. 18

6. 13

7. 12

8. 8

9. 10